

SANSKAR BHARTI SCHOOL

Summer Holidays Homework

Class: THIRD (3)

Student Name: _____

Dear Children,

Hurry! Finally the summer holidays are here. Holidays are great, but school home-work can be fun and inspiring too! So to keep you engaged and active, here are a few interesting activities for the summer break


Fun under the Sun

Beat the heat by learning to make tasty summer drinks like lemon juice, lassie, milk shake, fruit smoothies or sherbats (take help from your parents).



Color Me

2 . Draw a colorful picture of garden. Write 5 sentence on it.



Horizontal lines for writing 5 sentences.

19	X	1	=	

20	X	1	=	






(2) Write the numeral for:-

- a. Six thousand five hundred twelve = _____
- b. Seven thousand eight hundred = _____
- c. Five thousand two hundred five = _____
- d. Five thousand fourteen = _____

(3) Write the number name of :-

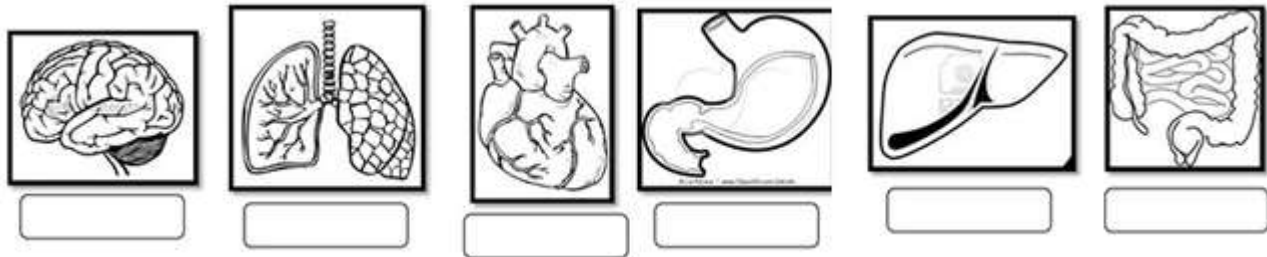
- a. 2380 – _____
- b. 8009 – _____
- c. 1522- _____
- d. 420- _____

(4) Activity- Paste a joker with the help of Colourful papers.

 Blue colour
  Yellow colour
 Red colour.
  Black colour
 Green colour

E.V.S.

1. Write the names of the following internal organs.



2. Unscramble the internal organs words.

- 1. nesintites: _____
- 2. Verli: _____
- 3. chstoma: _____
- 4. Sungl: _____
- 5. tareh: _____
- 6. Nirab: _____

3. Match the internal organ with its corresponding function.

- | | |
|---------------|--|
| 1. Brain | A. It produces substances for the digestion. |
| 2. Heart | B. They absorb nutritive substances and eliminate the waste. |
| 3. Lungs | C. It controls the nervous system. |
| 4. Stomach | D. It pumps blood into the body. |
| 5. Intestines | E. They take oxygen from the air and eliminate carbon dioxide. |
| 6. Liver | F. It is the organ that processes the food. |

4. Complete this Vocabulary with the help of hint box

Plant Vocabulary

Use the vocabulary words in the box to complete the sentences below.

seeds	oxygen	water
life cycle	fruit	pollen
leaves	stem	roots

1. New plants grow from _____.

2. Plants give off _____ to help us breathe.

3. The _____ of a plant grow underground.

4. Insects carry _____ from flower to flower.

5. The _____ of a plant shows how it grows, lives and dies.

6. All plants need sunlight, food and _____.

7. The _____ of a plant grow on the stem.

8. Sometimes, a plant can grow _____ that we can eat.

9. The part of the plant that holds it up straight is the _____.



5. Complete this sheet

Living things

A. How do these reproduce?


Hen : _____ Human beings : _____

Mango : _____ Rose : _____

Crow : _____ Table : _____

Dog : _____ Lotus : _____

B. Match the life cycle of the following living things.



C. Fill in the blanks using the helping words in the box.

sun food living reproduce man-made pot natural

1. Animals need _____ to grow.
2. Wood is a _____ thing but furniture is a _____ thing.
3. Stem of a plant moves towards _____.
4. A mango tree is a _____ thing.
5. All living things _____ of their own kind.
6. _____ is a man-made object that is made from clay.

COMPUTER

1. Complete this sheet with the help of hint box


Computers: Inside & Out - Outer Hardware Labeling Worksheet

Choose the word that best describes the picture and write the word in the blank.

scanner	tower case	monitor
mouse	digital camera	printer
keyboard	trackball	speakers



1. _____



2. _____



3. _____



4. _____



5. _____



6. _____



7. _____



8. _____



9. _____

GK

1. Paste the picture of 10 types of trees.

DRAWING

1. Collect some beautiful picture with your family and make a decorative collage of these pictures on A4 size sheet.