

# SANSKAR BHARTI SCHOOL

Summer Holidays Homework

Class: FOURTH (4)

## ENGLISH .....

1. Write 8-10 lines on the given topics.

a) My Favorite Food

b) I Like My House

2. Answer the following questions

a) What is a noun?

a. action word

b. describing word

c. person, place, or thing

b) Circle the nouns in the sentence below:

The dog ran through the mud with his bone.

Sam and Molly went to the bank to get money.

c) The word "library" is a:

a. person

b. place


c. thing –

d) Write 3 nouns that name a place: -

e) Write 3 nouns that name a person:


f) Write 3 nouns that name a thing:

3. Learn and write poem 'Wake Up'



## HINDI .....

प्रश्न 1- चित्र को देखकर उसका वर्णन अपने शब्दों में कीजिए।



प्रश्न 2- दिए गये विषयों पर आठ से दस वाक्य लिखो

1) जल

2) आपका गांव

प्रश्न 3 भाषा की परिभाषा लिखते हुए मौखिक भाषा और लिखित भाषा में अंतर बताइए।

प्रश्न 4- शरीर के अंगों से संबंधित मुहावरों के आधार पर शरीर के अंग के चित्र बनाकर उसके नीचे उससे संबंधित मुहावरे लिखिए।

प्रश्न 5 कोरोना महामारी से बचाव का संदेश देते हुए एक सुंदर पोस्टर तैयार कीजिए।

## MATHS .....

(1) Learn and write table 20 to 25.

(2) Solve all the questions in your notebook.

Q.1 Arrange in ascending order.

(A) 245, 312, 15, 105, 212- \_\_\_\_\_

(B) 48, 73, 544, 602, 118- \_\_\_\_\_

Q.2 Arrange in descending order.

(A) 125, 455, 114, 582, 282- \_\_\_\_\_

(B) 137, 174, 123, 199, 155- \_\_\_\_\_

Q.3 Write in short form.

(A)  $700+60+0=$  \_\_\_\_\_

(B)  $800+0+8=$  \_\_\_\_\_

(C)  $600+70+0=$  \_\_\_\_\_

(D)  $500+80+8=$  \_\_\_\_\_

(E)  $900+0+7=$  \_\_\_\_\_

Q.4 Write in the symbol that makes the problem true. ( $=, >, <$ )

(A)  $647$  \_\_\_\_\_  $547$ .

(B)  $89$  \_\_\_\_\_  $189$

(C)  $445$  \_\_\_\_\_  $445$

(D)  $45$  \_\_\_\_\_  $435$

Q.5 Write the number name for the following.

(A) 127- \_\_\_\_\_

(B) 255- \_\_\_\_\_

(C) 645- \_\_\_\_\_

(D) 179- \_\_\_\_\_

Q.6 Solve the following.

(A). 455

(B) 728

(C) 654

+ 726

+382

+543

\_\_\_\_\_

\_\_\_\_\_.

\_\_\_\_\_

\_\_\_\_\_.

\_\_\_\_\_.

\_\_\_\_\_

**E.V.S.** .....

**1. Read the following passage and answer the following questions**

**Ecosystems**

An ecosystem is all the things that interact in a specific area, whether they are living or non-living. Some examples of non-living things that support de in an ecosystem are light, air, soil and water. Living things are the plants and animals, called organisms that use those resources.

Each of the specific ecosystems in the world has its own conditions created by the non-living things. These conditions determine what kinds of living things will be able to thrive there. Organisms can only thrive where their needs are being met. Everything in an organism’s environment has an effect on it. One ecosystem that allows many different kinds of organisms to thrive is a temperate zone. It is an area where the conditions never become too hot or too cold.

All the living things in an ecosystem are called a community. All of one specific kind of organism living in a community is called a population. All the tree frogs in a rainforest community are one population within the community. All the white birch trees are another population within the same community. All the jaguars are yet another rainforest community population.

All living organisms perform certain life processes. They take in nutrients like air, sunlight, water and food. They use energy from those nutrients to grow and develop. They release energy by doing work and moving. They release waste products. They react to things in their environment they reproduce, producing offspring, or babies, that we similar to themselves.


- 1) What is one example of a non-living them in an ecosystem?
- 2) What are three of the life processes that living organisms do?
- 3) What does population mean in a community?
- 4) When does an organism thrive?
- 5) Why does a temperate zone support many varieties of organisms?

2. Using Across and down clues complete the following word puzzle



# Water Cycle Crossword

Using the Across and Down clues, write the correct words in the numbered grid below.



## ACROSS

1. The continuous movement of water from each state is called the water.....
3. In the water cycle, water can be a solid, \_\_\_\_\_ or a gas.
5. I am rain, sleet, snow or hail.
7. When vapor rises and gets cold, it becomes clouds. This process is....
8. A solid form of water.
9. I provide heat and the water cycle couldn't happen without me.
10. Water that seeps back into the earth.

## DOWN

2. The sun causes water to turn to a vapor or a gas.
4. These animals drank the same water we do.
6. Water is constantly doing this.

3. Complete worksheets of Chapter.- 'The living world'.

## Plant Kingdom

### A. Fill in the blanks. Use the words in the box.

reproduce plants fruit place  
stimuli grow die breathe

1. Living beings \_\_\_\_\_, \_\_\_\_\_ and \_\_\_\_\_.
2. The seeds germinate and develop into \_\_\_\_\_.
3. Living beings move from one \_\_\_\_\_ to another.
4. The flowers produce \_\_\_\_\_.
5. Living beings respond to \_\_\_\_\_.
6. Non living beings do not \_\_\_\_\_.

### B. Experiment:

A leaf of a plant is covered with a plastic bag.  
After some time droplets of water are found in  
side the bag. What do you understand from this?



---

---

---

---

---

---

**Activity:** Put a leaf under a white sheet of paper. Hold it, hold the pencil tip sideways and rub on it. You will get an impression of the leaf.

### GK .....

1. Write current news of 15 days of summer vacations.
2. Paste the picture of 10 types of trees.

### DRAWING .....

1. Collect some beautiful picture with your family and make a decorative collage of these pictures on A4 size sheet.

# COMPUTER .....

## I) Rewrite a correct statement for the incorrect statements .

A) Small pictures on the Desktop are called signs.

.....

B) A moving picture that is displayed when a computer is lying idle for some time is called the Wallpaper.

.....

C) The process of loading the Operating System when a computer is switched on is called tracking.

.....

D) The contents of a file can be text, pictures, videos, sound and games .

.....

## II) Can you name the following icons present on your Desktop:

a)  .....

b)  .....

c)  .....

d)  .....

e)  f) .....



## III) Circle the correct answer and then fill in the given blank :

a) MS Windows OPERATING System is..... to use.

(i) difficult

(ii) tough

(iii) easy

b) The Start button is found at the bottom ..... corner of the Desktop

(i) left

(ii) right

(iii) center

# Computer Scramble!

Unscramble the computer words below.

1. I T R O M N O

---

---

---

2. E T I R P R N

---

---

---

3. U M S E O

---

---

---

4. A O K R Y E D B

---

---

---

5. A S G M E

---

---

---

6. T W E I S E S B

---

---

---

7. E T E I T N R N

---

---

---

8. I Y N T G P

---

---

---

9. E L A N G N I R

---

---

---

10. C N S E A R N

---

---

---